









Rounding to the Nearest 10 - Year 3

Round to the Nearest 10

Round to the Nearest 10

<p>1a. Circle the numbers that round to 90.</p> <p style="text-align: center;"> <u>89</u> <u>78</u> <u>96</u> </p> <p style="text-align: center;"> <u>86</u> <u>91</u> <u>98</u> </p> <p style="text-align: center;"> <u>88</u> <u>87</u> <u>85</u> </p> <div style="display: flex; justify-content: space-between; align-items: flex-end;">  VF </div>	<p>1b. Circle the numbers that round to 140.</p> <p style="text-align: center;"> <u>131</u> <u>145</u> <u>144</u> </p> <p style="text-align: center;"> <u>139</u> <u>141</u> <u>136</u> </p> <p style="text-align: center;"> <u>135</u> <u>138</u> <u>146</u> </p> <div style="display: flex; justify-content: space-between; align-items: flex-end;">  VF </div>																				
<p>2a. True or false?</p> <p>155 to the nearest ten is 150.</p> <div style="display: flex; justify-content: space-between; align-items: flex-end;">  VF </div>	<p>2b. True or false?</p> <p>188 to the nearest ten is 190.</p> <div style="display: flex; justify-content: space-between; align-items: flex-end;">  VF </div>																				
<p>3a. Complete the table below.</p> <table border="1" style="width: 100%; border-collapse: collapse; text-align: center;"> <thead> <tr style="background-color: #d9e1f2;"> <th style="padding: 5px;">Number</th> <th style="padding: 5px;">Nearest 10</th> </tr> </thead> <tbody> <tr><td style="padding: 5px;"><u>344</u></td><td style="padding: 5px;"></td></tr> <tr><td style="padding: 5px;"><u>76</u></td><td style="padding: 5px;"></td></tr> <tr><td style="padding: 5px;"><u>801</u></td><td style="padding: 5px;"></td></tr> <tr><td style="padding: 5px;"><u>654</u></td><td style="padding: 5px;"></td></tr> </tbody> </table> <div style="display: flex; justify-content: space-between; align-items: flex-end;">  VF </div>	Number	Nearest 10	<u>344</u>		<u>76</u>		<u>801</u>		<u>654</u>		<p>3b. Complete the table below.</p> <table border="1" style="width: 100%; border-collapse: collapse; text-align: center;"> <thead> <tr style="background-color: #d9e1f2;"> <th style="padding: 5px;">Number</th> <th style="padding: 5px;">Nearest 10</th> </tr> </thead> <tbody> <tr><td style="padding: 5px;"><u>88</u></td><td style="padding: 5px;"></td></tr> <tr><td style="padding: 5px;"><u>222</u></td><td style="padding: 5px;"></td></tr> <tr><td style="padding: 5px;"><u>456</u></td><td style="padding: 5px;"></td></tr> <tr><td style="padding: 5px;"><u>781</u></td><td style="padding: 5px;"></td></tr> </tbody> </table> <div style="display: flex; justify-content: space-between; align-items: flex-end;">  VF </div>	Number	Nearest 10	<u>88</u>		<u>222</u>		<u>456</u>		<u>781</u>	
Number	Nearest 10																				
<u>344</u>																					
<u>76</u>																					
<u>801</u>																					
<u>654</u>																					
Number	Nearest 10																				
<u>88</u>																					
<u>222</u>																					
<u>456</u>																					
<u>781</u>																					
<p>4a. Sort the numbers into the table.</p> <p style="text-align: center;"> <u>103</u> <u>99</u> <u>108</u> </p> <p style="text-align: center;"> <u>105</u> <u>101</u> <u>114</u> </p> <table border="1" style="width: 100%; border-collapse: collapse; text-align: center;"> <thead> <tr style="background-color: #d9d9d9;"> <th style="padding: 5px;">Rounds to 100</th> <th style="padding: 5px;">Rounds to 110</th> </tr> </thead> <tbody> <tr><td style="height: 100px;"></td><td style="height: 100px;"></td></tr> </tbody> </table> <div style="display: flex; justify-content: space-between; align-items: flex-end;">  VF </div>	Rounds to 100	Rounds to 110			<p>4b. Sort the numbers into the table.</p> <p style="text-align: center;"> <u>144</u> <u>145</u> <u>136</u> </p> <p style="text-align: center;"> <u>154</u> <u>149</u> <u>139</u> </p> <table border="1" style="width: 100%; border-collapse: collapse; text-align: center;"> <thead> <tr style="background-color: #d9d9d9;"> <th style="padding: 5px;">Rounds to 140</th> <th style="padding: 5px;">Rounds to 150</th> </tr> </thead> <tbody> <tr><td style="height: 100px;"></td><td style="height: 100px;"></td></tr> </tbody> </table> <div style="display: flex; justify-content: space-between; align-items: flex-end;">  VF </div>	Rounds to 140	Rounds to 150														
Rounds to 100	Rounds to 110																				
Rounds to 140	Rounds to 150																				

Round to the Nearest 10 - Year 4

Round to the Nearest 10


5a. Circle the numbers that round to 60.

55 161 sixty-seven

 62 fifty-seven 64

fifty-nine 155 54

 58 sixty-six 69

 VF


5b. Circle the numbers that round to 90.

199 ninety-four 91

 95 89 eighty-one


 ninety-three 196 88

 84 eighty-five 99

 VF


6a. True or false?

Five hundred and thirty-two to the nearest ten is five hundred and forty.

 VF


6b. True or false?

Six hundred and fifty-eight to the nearest ten is six hundred and fifty.

 VF


7a. Complete the table below.

Number	Nearest 10
782	
ninety-two	
488	
one hundred and nine	

 VF

7b. Complete the table below.

Number	Nearest 10
185	
thirty-six	
368	
six hundred and thirteen	


 VF

8a. Sort the numbers into the table.

435 454 442

 451 445 444

Rounds to 440	Rounds to 450


 VF

8b. Sort the numbers into the table.

981 994 987

 976 992 984

Rounds to 980	Rounds to 990

 VF

